


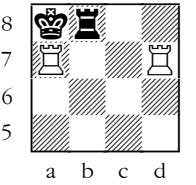
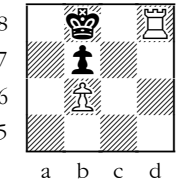
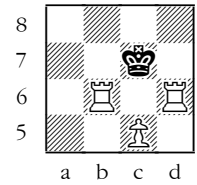
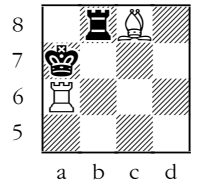
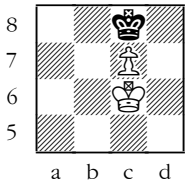





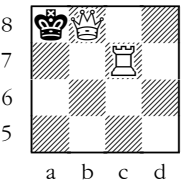
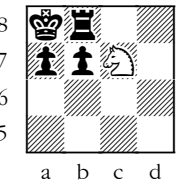
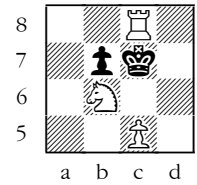


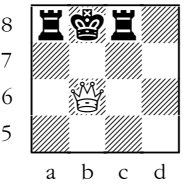
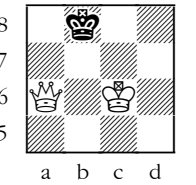



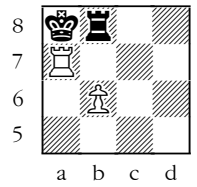


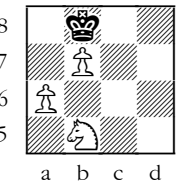




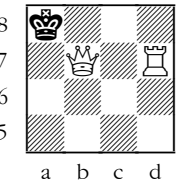
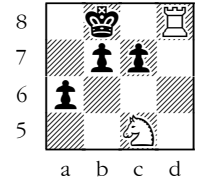



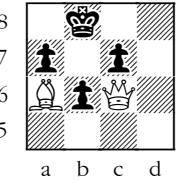





**Mini-Exercises** *compiled by Steven Craig Miller*

**Instructions:** For each diagram, it is always Black's turn to move. Decide whether Black has been checkmated, stalemated, or is able to make a legal move. Make your decisions based only on the part of the chessboard that is visible for each exercise.

 <p>a b c d</p>	 <p>a b c d</p>	 <p>a b c d</p>	 <p>a b c d</p>	 <p>a b c d</p>
<input type="checkbox"/> checkmate	<input type="checkbox"/> checkmate	<input type="checkbox"/> checkmate	<input type="checkbox"/> checkmate	<input type="checkbox"/> checkmate
<input type="checkbox"/> stalemate	<input type="checkbox"/> stalemate	<input type="checkbox"/> stalemate	<input type="checkbox"/> stalemate	<input type="checkbox"/> stalemate
<input type="checkbox"/> Black can move	<input type="checkbox"/> Black can move	<input type="checkbox"/> Black can move	<input type="checkbox"/> Black can move	<input type="checkbox"/> Black can move
 <p>a b c d</p>	 <p>a b c d</p>	 <p>a b c d</p>	 <p>a b c d</p>	 <p>a b c d</p>
<input type="checkbox"/> checkmate	<input type="checkbox"/> checkmate	<input type="checkbox"/> checkmate	<input type="checkbox"/> checkmate	<input type="checkbox"/> checkmate
<input type="checkbox"/> stalemate	<input type="checkbox"/> stalemate	<input type="checkbox"/> stalemate	<input type="checkbox"/> stalemate	<input type="checkbox"/> stalemate
<input type="checkbox"/> Black can move	<input type="checkbox"/> Black can move	<input type="checkbox"/> Black can move	<input type="checkbox"/> Black can move	<input type="checkbox"/> Black can move
 <p>a b c d</p>	 <p>a b c d</p>	 <p>a b c d</p>	 <p>a b c d</p>	 <p>a b c d</p>
<input type="checkbox"/> checkmate	<input type="checkbox"/> checkmate	<input type="checkbox"/> checkmate	<input type="checkbox"/> checkmate	<input type="checkbox"/> checkmate
<input type="checkbox"/> stalemate	<input type="checkbox"/> stalemate	<input type="checkbox"/> stalemate	<input type="checkbox"/> stalemate	<input type="checkbox"/> stalemate
<input type="checkbox"/> Black can move	<input type="checkbox"/> Black can move	<input type="checkbox"/> Black can move	<input type="checkbox"/> Black can move	<input type="checkbox"/> Black can move
 <p>a b c d</p>	 <p>a b c d</p>	 <p>a b c d</p>	 <p>a b c d</p>	 <p>a b c d</p>
<input type="checkbox"/> checkmate	<input type="checkbox"/> checkmate	<input type="checkbox"/> checkmate	<input type="checkbox"/> checkmate	<input type="checkbox"/> checkmate
<input type="checkbox"/> stalemate	<input type="checkbox"/> stalemate	<input type="checkbox"/> stalemate	<input type="checkbox"/> stalemate	<input type="checkbox"/> stalemate
<input type="checkbox"/> Black can move	<input type="checkbox"/> Black can move	<input type="checkbox"/> Black can move	<input type="checkbox"/> Black can move	<input type="checkbox"/> Black can move

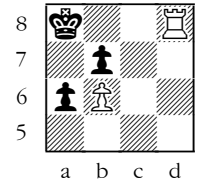










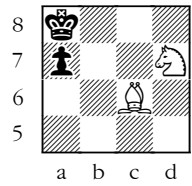




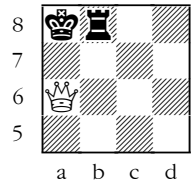



**Mini-Exercises** *compiled by Steven Craig Miller*

**Instructions:** For each diagram, it is always Black's turn to move. Decide whether Black has been checkmated, stalemated, or is able to make a legal move. Make your decisions based only on the part of the chessboard that is visible for each exercise.

 <p>a b c d</p> <p><input type="checkbox"/> checkmate  <input type="checkbox"/> stalemate  <input type="checkbox"/> Black can move</p>	 <p>a b c d</p> <p><input type="checkbox"/> checkmate  <input type="checkbox"/> stalemate  <input type="checkbox"/> Black can move</p>	 <p>a b c d</p> <p><input type="checkbox"/> checkmate  <input type="checkbox"/> stalemate  <input type="checkbox"/> Black can move</p>	 <p>a b c d</p> <p><input type="checkbox"/> checkmate  <input type="checkbox"/> stalemate  <input type="checkbox"/> Black can move</p>	 <p>a b c d</p> <p><input type="checkbox"/> checkmate  <input type="checkbox"/> stalemate  <input type="checkbox"/> Black can move</p>
 <p>a b c d</p> <p><input type="checkbox"/> checkmate  <input type="checkbox"/> stalemate  <input type="checkbox"/> Black can move</p>	 <p>a b c d</p> <p><input type="checkbox"/> checkmate  <input type="checkbox"/> stalemate  <input type="checkbox"/> Black can move</p>	 <p>a b c d</p> <p><input type="checkbox"/> checkmate  <input type="checkbox"/> stalemate  <input type="checkbox"/> Black can move</p>	 <p>a b c d</p> <p><input type="checkbox"/> checkmate  <input type="checkbox"/> stalemate  <input type="checkbox"/> Black can move</p>	 <p>a b c d</p> <p><input type="checkbox"/> checkmate  <input type="checkbox"/> stalemate  <input type="checkbox"/> Black can move</p>
 <p>a b c d</p> <p><input type="checkbox"/> checkmate  <input type="checkbox"/> stalemate  <input type="checkbox"/> Black can move</p>	 <p>a b c d</p> <p><input type="checkbox"/> checkmate  <input type="checkbox"/> stalemate  <input type="checkbox"/> Black can move</p>	 <p>a b c d</p> <p><input type="checkbox"/> checkmate  <input type="checkbox"/> stalemate  <input type="checkbox"/> Black can move</p>	 <p>a b c d</p> <p><input type="checkbox"/> checkmate  <input type="checkbox"/> stalemate  <input type="checkbox"/> Black can move</p>	 <p>a b c d</p> <p><input type="checkbox"/> checkmate  <input type="checkbox"/> stalemate  <input type="checkbox"/> Black can move</p>
 <p>a b c d</p> <p><input type="checkbox"/> checkmate  <input type="checkbox"/> stalemate  <input type="checkbox"/> Black can move</p>	 <p>a b c d</p> <p><input type="checkbox"/> checkmate  <input type="checkbox"/> stalemate  <input type="checkbox"/> Black can move</p>	 <p>a b c d</p> <p><input type="checkbox"/> checkmate  <input type="checkbox"/> stalemate  <input type="checkbox"/> Black can move</p>	 <p>a b c d</p> <p><input type="checkbox"/> checkmate  <input type="checkbox"/> stalemate  <input type="checkbox"/> Black can move</p>	 <p>a b c d</p> <p><input type="checkbox"/> checkmate  <input type="checkbox"/> stalemate  <input type="checkbox"/> Black can move</p>



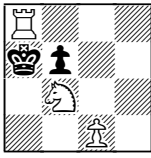

















**Mini-Exercises** *compiled by Steven Craig Miller*

**Instructions:** For each diagram, it is always Black's turn to move. Decide whether Black has been checkmated, stalemated, or is able to make a legal move. Make your decisions based only on the part of the chessboard that is visible for each exercise.

 <p>a b c d</p>	 <p>a b c d</p>	 <p>a b c d</p>	 <p>a b c d</p>	 <p>a b c d</p>
<input type="checkbox"/> checkmate <input type="checkbox"/> stalemate <input type="checkbox"/> Black can move	<input type="checkbox"/> checkmate <input type="checkbox"/> stalemate <input type="checkbox"/> Black can move	<input type="checkbox"/> checkmate <input type="checkbox"/> stalemate <input type="checkbox"/> Black can move	<input type="checkbox"/> checkmate <input type="checkbox"/> stalemate <input type="checkbox"/> Black can move	<input type="checkbox"/> checkmate <input type="checkbox"/> stalemate <input type="checkbox"/> Black can move
 <p>a b c d</p>	 <p>a b c d</p>	 <p>a b c d</p>	 <p>a b c d</p>	 <p>a b c d</p>
<input type="checkbox"/> checkmate <input type="checkbox"/> stalemate <input type="checkbox"/> Black can move	<input type="checkbox"/> checkmate <input type="checkbox"/> stalemate <input type="checkbox"/> Black can move	<input type="checkbox"/> checkmate <input type="checkbox"/> stalemate <input type="checkbox"/> Black can move	<input type="checkbox"/> checkmate <input type="checkbox"/> stalemate <input type="checkbox"/> Black can move	<input type="checkbox"/> checkmate <input type="checkbox"/> stalemate <input type="checkbox"/> Black can move
 <p>a b c d</p>	 <p>a b c d</p>	 <p>a b c d</p>	 <p>a b c d</p>	 <p>a b c d</p>
<input type="checkbox"/> checkmate <input type="checkbox"/> stalemate <input type="checkbox"/> Black can move	<input type="checkbox"/> checkmate <input type="checkbox"/> stalemate <input type="checkbox"/> Black can move	<input type="checkbox"/> checkmate <input type="checkbox"/> stalemate <input type="checkbox"/> Black can move	<input type="checkbox"/> checkmate <input type="checkbox"/> stalemate <input type="checkbox"/> Black can move	<input type="checkbox"/> checkmate <input type="checkbox"/> stalemate <input type="checkbox"/> Black can move
 <p>a b c d</p>	 <p>a b c d</p>	 <p>a b c d</p>	 <p>a b c d</p>	 <p>a b c d</p>
<input type="checkbox"/> checkmate <input type="checkbox"/> stalemate <input type="checkbox"/> Black can move	<input type="checkbox"/> checkmate <input type="checkbox"/> stalemate <input type="checkbox"/> Black can move	<input type="checkbox"/> checkmate <input type="checkbox"/> stalemate <input type="checkbox"/> Black can move	<input type="checkbox"/> checkmate <input type="checkbox"/> stalemate <input type="checkbox"/> Black can move	<input type="checkbox"/> checkmate <input type="checkbox"/> stalemate <input type="checkbox"/> Black can move

**Mini-Exercises** *compiled by Steven Craig Miller*

**Instructions:** For each diagram, it is always Black's turn to move. Decide whether Black has been checkmated, stalemated, or is able to make a legal move. Make your decisions based only on the part of the chessboard that is visible for each exercise.

 <p>a b c d</p>	 <p>a b c d</p>	 <p>a b c d</p>	 <p>a b c d</p>	 <p>a b c d</p>
<input type="checkbox"/> checkmate	<input type="checkbox"/> checkmate	<input type="checkbox"/> checkmate	<input type="checkbox"/> checkmate	<input type="checkbox"/> checkmate
<input type="checkbox"/> stalemate	<input type="checkbox"/> stalemate	<input type="checkbox"/> stalemate	<input type="checkbox"/> stalemate	<input type="checkbox"/> stalemate
<input type="checkbox"/> Black can move	<input type="checkbox"/> Black can move	<input type="checkbox"/> Black can move	<input type="checkbox"/> Black can move	<input type="checkbox"/> Black can move
 <p>a b c d</p>	 <p>a b c d</p>	 <p>a b c d</p>	 <p>a b c d</p>	 <p>a b c d</p>
<input type="checkbox"/> checkmate	<input type="checkbox"/> checkmate	<input type="checkbox"/> checkmate	<input type="checkbox"/> checkmate	<input type="checkbox"/> checkmate
<input type="checkbox"/> stalemate	<input type="checkbox"/> stalemate	<input type="checkbox"/> stalemate	<input type="checkbox"/> stalemate	<input type="checkbox"/> stalemate
<input type="checkbox"/> Black can move	<input type="checkbox"/> Black can move	<input type="checkbox"/> Black can move	<input type="checkbox"/> Black can move	<input type="checkbox"/> Black can move
 <p>a b c d</p>	 <p>a b c d</p>	 <p>a b c d</p>	 <p>a b c d</p>	 <p>a b c d</p>
<input type="checkbox"/> checkmate	<input type="checkbox"/> checkmate	<input type="checkbox"/> checkmate	<input type="checkbox"/> checkmate	<input type="checkbox"/> checkmate
<input type="checkbox"/> stalemate	<input type="checkbox"/> stalemate	<input type="checkbox"/> stalemate	<input type="checkbox"/> stalemate	<input type="checkbox"/> stalemate
<input type="checkbox"/> Black can move	<input type="checkbox"/> Black can move	<input type="checkbox"/> Black can move	<input type="checkbox"/> Black can move	<input type="checkbox"/> Black can move
 <p>a b c d</p>	 <p>a b c d</p>	 <p>a b c d</p>	 <p>a b c d</p>	 <p>a b c d</p>
<input type="checkbox"/> checkmate	<input type="checkbox"/> checkmate	<input type="checkbox"/> checkmate	<input type="checkbox"/> checkmate	<input type="checkbox"/> checkmate
<input type="checkbox"/> stalemate	<input type="checkbox"/> stalemate	<input type="checkbox"/> stalemate	<input type="checkbox"/> stalemate	<input type="checkbox"/> stalemate
<input type="checkbox"/> Black can move	<input type="checkbox"/> Black can move	<input type="checkbox"/> Black can move	<input type="checkbox"/> Black can move	<input type="checkbox"/> Black can move